



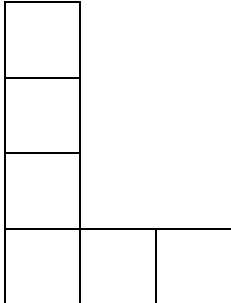
Do not write
outside the
box

23

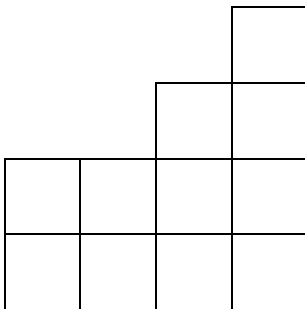
A solid shape is made from centimetre cubes.

Here are the plan, side elevation and front elevation of the shape.

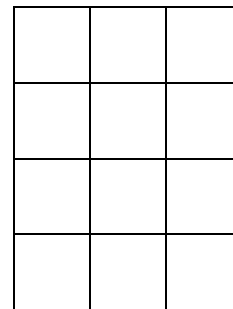
Plan



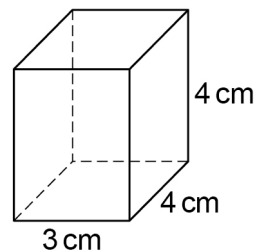
Side elevation



Front elevation



Centimetre cubes are added to make this cuboid.



How many cubes are added?

[3 marks]

Answer _____

6

Turn over ►

