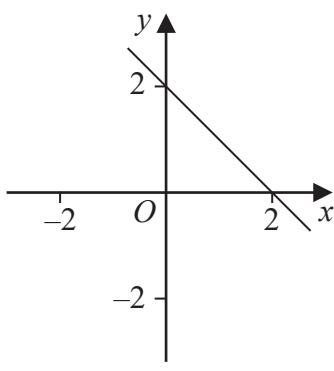


DO NOT WRITE IN THIS AREA

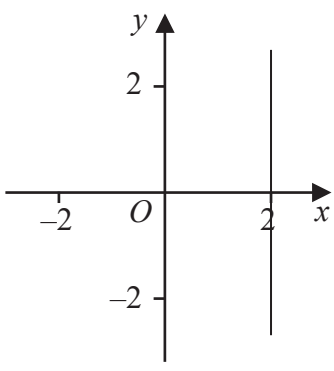
DO NOT WRITE IN THIS AREA

DO NOT WRITE IN THIS AREA

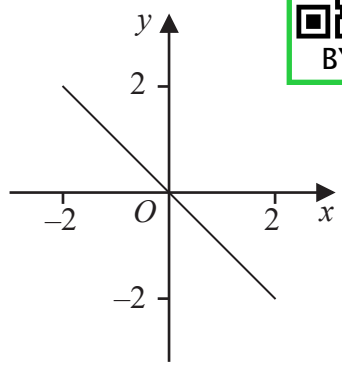
13 Here are six straight line graphs.



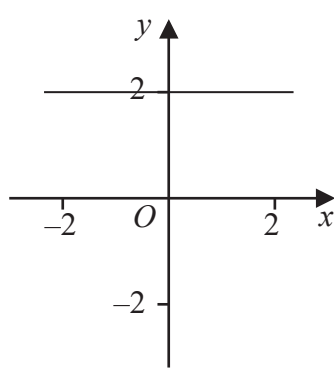
Graph A



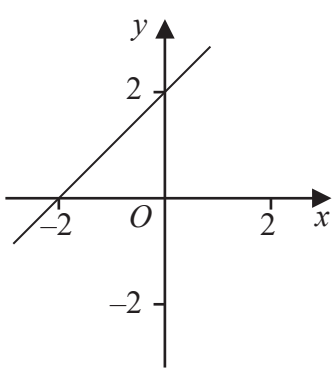
Graph B



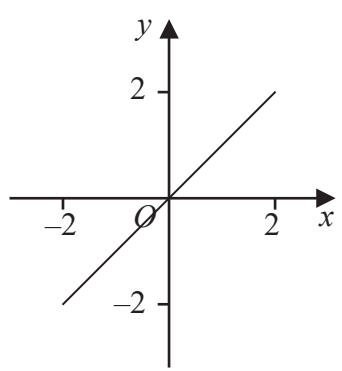
Graph C



Graph D



Graph E



Graph F

Match each equation in the table to the correct graph. Write the letter of the graph in the table.

Equation	Graph
$y = 2$	
$y = x$	
$x + y = 2$	

(Total for Question 13 is 2 marks)

