

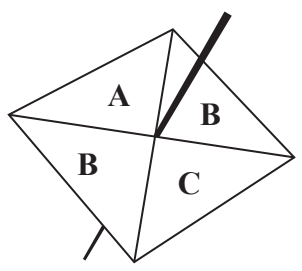
DO NOT WRITE IN THIS AREA

5 Work out 60% of 70

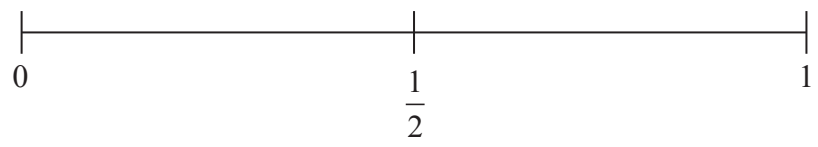


(Total for Question 5 is 2 marks)

6 Sammy spins a fair 4-sided spinner.

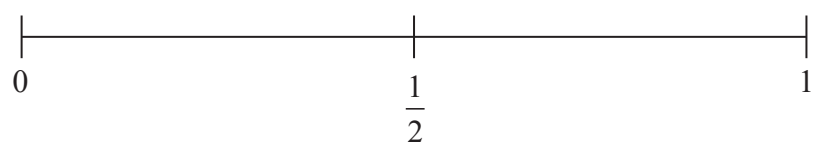


(i) On the probability scale, mark with a cross (×) the probability that the spinner will land on **B**.



(1)

(ii) On the probability scale, mark with a cross (×) the probability that the spinner will land on **F**.



(1)

(Total for Question 6 is 2 marks)

DO NOT WRITE IN THIS AREA

