




- 5 Thais has a large bottle of shampoo.  
There are 2 litres of shampoo in the large bottle.

Thais also has some empty small bottles.  
Each small bottle can be completely filled with 150 ml of shampoo.

How many small bottles can be completely filled with shampoo from the large bottle?

(Total for Question 5 is 3 marks)

- 6 The incomplete pictogram shows information about the number of cycles sold in a shop on Tuesday, on Wednesday and on Thursday.

Tuesday	
Wednesday	
Thursday	
Friday	
Saturday	

Key:

A total of 20 cycles were sold on Tuesday, Wednesday and Thursday.

8 cycles were sold on Friday.

15 cycles were sold on Saturday.

Use this information to complete the pictogram.

(Total for Question 6 is 3 marks)

